

28.1.21 Maths

Hook

This is Sophie's work. Is she correct?

$$45 - 21 = 44$$



Task 1

1. $97 - 68 =$



3. $67 - 28 =$



5. $87 - 19 =$



2. $83 - 47 =$











4. $72 - 39 =$



6. $37 - 29 =$



Task 2 Find as many possibilities as you can.

<p>You have 42p, subtract the price of a doughnut from the money you have. How much would you have left?</p>			
 <p>doughnut 27</p>	 <p>Sprinkle doughnuts 25</p>	 <p>Choc doughnuts 38</p>	 <p>Strawberry doughnut 18</p>
 <p>Pirate doughnut 36</p>	 <p>Lemon doughnut 15</p>	 <p>Cream doughnut 29</p>	 <p>Choc Orange doughnut 36</p>